

Name: _____

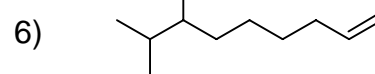
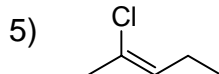
Block: _____

Chapter 10-12 Nomenclature Review

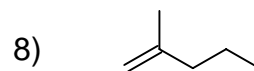
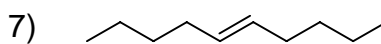
Please provide examples of the organic functional groups:

Please provide the names (or structure) for the following:

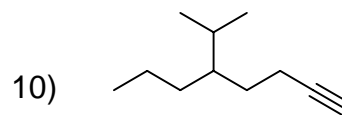
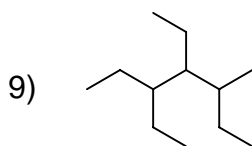
1) 4-(propan-2-yl)hepta-1,6-diene



2) 3,3,6,6-tetrafluorocyclohexa-1,4-diene



3) 6-ethyl-2,3,4,6-tetramethyloctane



4) E-2-chloropent-2-ene

